

DEPARTMENTAL MEETING - II
2017-18

5

Date: 2-12-2017

The Department meeting was held in the JKC Department on 2-12-2017. After discussing with all the members and students, it is resolved to enrich the existing curriculum by initiating a Certificate course in "Analytical skills" for the benefit of students in the Academic year 2017-18.

A proposal seeking permission to start the course should be submitted to the principal by Today Evening.

Course name: Analytical Skills

Course Duration: 30 TO 40 DAYS

Student Intake: 30 TO 40

Resource person: T.V.L.R.K. PRASAD

Formative Assessment: 15 Marks

Summative Assessment: 25 Marks

Qualifying marks: 15 (FIFTEEN) marks

Minimum Attendance for Semester test is 75%.

J.K.C. COORDINATOR
Govt. Degree College,
Ganapavaram.

J.K.C. COORDINATOR
Govt. Degree College,
Ganapavaram.

PRINCIPAL
S.S.G.H.V.P.M.R. Govt. Degree College
Ganapavaram-524199, (W.G. Dist)



SRI CHINTALAPATI VARA PRASADA MURTHY RAJU
GOVERNMENT DEGREE COLLEGE

GANAPAVARAM-534 198

ESTD. 1972 • AFFILIATED TO ADIKAVI NANNAYA UNIVERSITY • ACCREDITED NAAC 'B'



JAWAHAR KNOWLEDGE CENTRE

Date: 02.12.2017

From

I V L R K PRASAD

In-charge, Dept. of Jawahar Knowledge Centre
SCHVPMR Govt. Degree College
Ganapavaram

To

The Principal
SCHVPMR Govt. Degree College
Ganapavaram

Sub: Skill Enrichment for 2017-18 - Dept. of Jawahar Knowledge Centre - proposal for starting a Certificate Course in Analytical Skills - Request for permission - Reg.

This is to submit that the Dept. of Jawahar Knowledge Centre is proposing to start a Certificate Course in "Analytical Skills" during the academic year 2017-18, for the benefit of the students. Hence, this proposal is submitted seeking your permission.

Course duration: 30 to 40 days
Student intake: 30
Name of Faculty: I V L R K PRASAD
Formative Assessment 15 marks (objective type)
Summative Assessment 25 marks (objective type)
Qualifying mark 15

Objectives:

Course Objectives:

- Examine the concept of analysis
- Distinguish between analytical thought
- skill and ability.
- Apply analytical thinking tools for solving problems.


In-charge

Dept. of Department of Jawahar Knowledge Centre
Govt. Degree College,
Ganapavaram.



SRI CHINTALAPATI VARA PRASADA MURTHY RAJU
GOVERNMENT DEGREE COLLEGE

GANAPAVARAM-534 198

ESTD. 1972 • AFFILIATED TO ADIKAVI NANNAYA UNIVERSITY • ACCREDITED NAAC 'B'



Proceedings of the Principal (FAC), SCHVPMR Govt. Degree College, Ganapavaram


Present: P MADHU RAJU., M.Sc.,M.Phil,

Re.No.15/2/CC-17-18

Dated 02.12.2017

Sub: Dept. of Jawahar Knowledge Center - Proposal for Certificate Course in
Analytical Skills for the academic year 2017-18 - Permission granted - Orders
issued - Reg.

The Principal, SCHVPMR Govt. Degree College, Ganapavaram is pleased to grant permission to launch a Certificate Course in "Analytical Skills" by the Department of Jawahar Knowledge Centre during the academic year 2017-18. The In-charge, Department of Jawahar Knowledge Centre is requested to follow the due procedure for conducting the said course and submit a report thereof.


PRINCIPAL
S.CH.V.P.M.R.Govt. Degree College
GANAPAVARAM-534198. (W.G.Dist)

CIRCULAR

Date: 2-12-2017

This is to Inform all the Students that a Certificate Course in "Analytical Skills" is going to be started from 4-12-2017. under JKC platform of the College, In this regards all the final year students are instructed to register their names on or before 4-12-2017. name of the certificate course: Analytical Skills
 start date: 4-12-2017


Venue: JKC Room


TIME: 4 PM TO 5 PM (Every DAY)

Resource person: I.V.L.R.K. PRASAD

For circulation

1. IIIrd BA Course
2. IIIrd B.Com (Gen) & (Computer) B
3. IIIrd BSc (MPC) (A)
4. IIIrd BSc (MPC) P. Annex
5. IIIrd BSc (BZC) V. Annex.


 J.K.C. COORDINATOR
 Govt. Degree College,
 Ganapavaram.


 PRINCIPAL
 S.CH.V.P.M.R. Govt. Degree College
 GANAPAVARAM 534158. (W.G. Dist)

Principal
 S.Ch.V.P.M.R. Govt. Degree College
 Ganapavaram



JAWAHAR KNOWLEDGE CENTRE
CERTIFICATE COURSES
ANALYTICAL SKILLS SYLLABUS

Analytical Skills- 32 Hours	
Arithmetic-16	
Reasoning- 16	
TOTAL :32 HOURS	
Day	Topic
Unit-1	
Day 1	Ratios
Day 2	Percentages
Day 3	Profit & Loss
Day 4	Partnership
Day 5	Data Interpretation
Day 6	Data Interpretation
Unit-2	
Day 7	Simple Interest-
Day 8	Compound Interest
Unit-3	
Day 9	Averages
Day 10	Problems on Ages
Unit-4	
Day 11	Time & Work
Day 12	Time & Distance
Day 13	Problems on Trains
Unit-5	
Day 14	LCM & HCF
Day 15	Areas
Day 16	Volumes
Part- B (Reasoning)-16 Hours	
Unit 6	
Day 17	Number Series
Day 18	Number Analogy
Day 19	Number Classification
Day 20	Coding & Decoding-1
Day 21	Coding & Decoding-2
Unit -7	
Day 22	Blood Relations-1
Day 23	Directional Sense Test-1
Day 24	Seating Arrangement-1
Day 25	Problems solving Techniques and Logical Reasoning
Day 26	Completion of Incomplete Patterns
Day 27	Number, Ranking and Time Sequence Test-2
Day 28	Mathematical Operations
Unit 8	
Day 29	Calendars
Day 30	Series, Analogy and Classification & Problem solving with pictures-1
Day 31	Logical VennDiagrams-1
Day 32	Logical VennDiagrams-2



SRI CHINTALAPATI VARA PRASADA MURTHY RAJU
GOVERNMENT DEGREE COLLEGE
GANAPAVARAM-534 198
ESTD. 1972 • AFFILIATED TO ADIKAVI NANNAYA UNIVERSITY • ACCREDITED NAAC 'B'



STUDENT REGISTRATION FORM

CERTIFICATE COURSE in

----- Analytical Skills -----

Course Outline

Duration: 40 days 4/12/2017 to 17/2/2018 Course fee:

Target group: II & III year students

PHOTO

Name of the Student: Padmanabhuni, Mounika Date: 04-12-2017

Gender: female

Program studying: B.A


College Admission Number of the student: 6251

Email: mounika.p@rediffmail.com

Mobile: 7799859637

Academic Year: 2017-18

P. Mounika
Signature of the student


Signature of the In-charge
JKC, COURSE
Govt. Degree College,
Ganapavaram.



SRI CHINTALAPATI VARA PRASADA MURTHY RAJU
GOVERNMENT DEGREE COLLEGE

GANAPAVARAM-534 198

ESTD. 1972 • AFFILIATED TO ADIKAVI NANNAYA UNIVERSITY • ACCREDITED NAAC 'B'



STUDENT REGISTRATION FORM

CERTIFICATE COURSE in

----- Analytical Skills -----

Course Outline

Duration: 40 days 04-12-2017 to 17-2-2018 Course fee:

Target group: II & III year students

PHOTO

Name of the Student: Kusume mesy mata

Date: 04/12/2017

Gender: Female

Program studying: B.A


College Admission Number of the student: 6261

Email: mesymata.kusume@rediffmail.com

Mobile: 9160797355

Academic Year: 2017-18

Kusume mesy mata
Signature of the student


Signature of the In-charge
JKC, COORDINATOR
Govt. Degree College,
Ganapavaram.



SRI CHINTALAPATI VARA PRASADA MURTHY RAJU
GOVERNMENT DEGREE COLLEGE

DANAPAVAHAM-534 198

ESTD. 1972 • AFFILIATED TO ADIKAVI NANNAYA UNIVERSITY • ACCREDITED NAAC 'B'



(Affiliated to Adikavi Nannaya University, Rajamahendravaram, A.P.)

Department of Jawahar Knowledge Centre

Certificate course on "Analytical Skills"


Academic Year: 2017-18

STUDENT ENROLLMENT LIST

Sl.No.	Admn. No.	Class	Name of the Student
1	6251	BA	PADMANABHUNI MOUNIKA
2	6261	BA	KUSUME MERYMATA
3	6219	BA	MADHUM MOUNIKA
4	6178	BA	GURRAM MOUNIKA
5	6185	BA	BONTHA ALEKHYA
6	6213	BA	DENDUKERI NAGA RAJU
7	6175	BA	PALLI RAMA LAKSHMI
8	6156	BA	GUDA NAVEEN
9	6162	BA	BAYYAVARAPU VARA PRASAD
10	6173	BA	SAKALABATTULA SAMPATH KUMAR
11	6250	BA	VASUPALLI HEPSIBA
12	6140	BA	SOMA SIREESHA
13	6189	BA	MOHAMMAD MOHISSIN
14	6237	BA	ALAMURI SHAKEELA RANI
15	6248	BA	BETU ALEKHYA
16	6228	BSC(BZC)	MADASI BHUKAYYA
17	6149	BSC(BZC)	BALE BHAVANI
18	6131	BSC(BZC)	MADDALA DIVYA
19	6230	BSC(BZC)	MUTYALA RAMYA SREE
20	6231	BSC(BZC)	RAJALA MAMATHA
21	6201	BSC(BZC)	PANDRANKI AMBIKA
22	6132	BSC(BZC)	SHEIK SALMA BEGUM

23	6150	BSC(BZC)	KASIREDDY JHANSI
24	6235	BSC(BZC)	THOTA PREMA JYOTHI
25	6252	BSC(BZC)	AMBATI SIRISHA RANI
26	6195	BSC(BZC)	ANIPE SREE RAMYA
27	6238	BSC(BZC)	BATRAJU PARAMJYOTHI
28	6161	BSC(BZC)	GORLA KOUSALYA
29	6198	BSC(BZC)	MANDILA JHANSI
30	6210	BSC(BZC)	PORAPU SARVANI

Course Coordinator


JEC. COORDINATOR
Govt. Degree College,
Ganapavaram.


Principal
PRINCIPAL

S.CH.V.P.M.R.Govt.Degree C.
GANAPAVARAM-534198. (W.G.Dist)

CIRCULAR

7

05.6-1-2017

All the "Analytical Skills" certificate course students are instructed to attend the "formative Assessment Test" on 8-1-2018. without fail.

VENUE: JKC Room

DATE: 8-1-2018


TIME: 4 pm TO 5 pm.

FOR CIRCULATION:-

1, IIIrd BA PAPER


2, IIIrd BSc (B2C) V-Sem

Principal
S.Ch.V.P.M.R. Govt. Degree College
GANAPAVARAM-534198. (W.G. DIST.)



JKC. COORDINATOR
Govt. Degree College,
Ganapavaram.

JKC. COORDINATOR
Govt. Degree College,
Ganapavaram.



Principal 118

S.CH.V.P.M.R. Govt. Degree College
GANAPAVARAM-534198. (W.G. DIST.)



SRI CHINTALAPATI VARA PRASADA MURTHY RAJU
GOVERNMENT DEGREE COLLEGE

GANAPAVARAM-534 198

ESTD. 1972 • AFFILIATED TO ADIKAVI NANNAYA UNIVERSITY • ACCREDITED NAAC 'B'



JAWAHAR KNOWLEDGE CENTRE

Certificate Course in "Analytical Skills"

Formative Assessment Test

11/15

Max. Marks: 15
Time: 30 minutes

Name of the Student: Gurram mounika

Group: BA

Admn. No.: 6178

- 1) South is related to North-West in the same way as West is related to ()
(A) East (B) South (C) South-West ~~(D) North-East~~
- 2) Street is related to Lane in the same way as Road is related to ()
~~(A) Avenue~~ (B) Highway (C) Junction (D) Footpath
- 3) Find out the wrong number in each sequence: ()
25, 36, 49, 81, 121, 169, 225
(A) 169 ~~(B) 121~~ (C) 49 (D) 36
- 4) Find out the wrong number in each sequence: ()
4, 6, 8, 9, 10, 11, 12
(A) 9 (B) 10 ~~(C) 11~~ (D) 12
- 5) Meeta is two years older than Sunita. After six years the sum of their ages will be seven times their present age. Find out the age of Meeta ()
(A) 6 years ~~(B) 8 years~~ (C) 10 years ~~(D) Data inadequate~~
- 6) Sachin was twice as old as Ajay 10 years back. How old is Ajay today if Sachin will be 40 years old 10 years hence? ()
(A) 10 years ~~(B) 20 years~~ (C) 30 years (D) 50 years
- 7) A city has a population of 3,00,000 out of which 1,80,000 are males. 50% of the population is literate. If 70% of the males are literate, then the percentage of females who are literate is ()
~~(A) 10%~~ (B) 20% (C) 25% (D) 30%
- 8) The HCF of two numbers is 11 and their LCM is 7700. If one of these numbers is 275, then the other one is ()
(A) 918 ~~(B) 308~~ (C) 283 (D) 279
- 9) The H.C.F. and L.C.M. of two numbers are 50 and 250 respectively. If the first number is divided by 2, the quotient is 50. The second number is ()
(A) 50 ~~(B) 100~~ (C) 105 (D) 125
- 10) The smallest prime number greater than 1000 is ()
(A) 1001 (B) 1003 ~~(C) 1009~~ (D) 1007
- 11) January 7, 1992 was Tuesday. Find the day of the week on the same date after 5 years, i.e., on January 7, 1997? ()
(A) Monday (B) Tuesday ~~(C) Wednesday~~ (D) Friday (E) Friday

12) The average age of 30 students is 9 years. If the age of their teacher is included, it becomes 10 years. The age of the teacher (in years) is ()
(A) 31 (B) 35 (C) 40 (D) 43

13) A table is offered for Rs.300 with 20% and 10% off. If in addition, a discount of 5% is offered on cash payment, then the cash price of the table is ()
(A) Rs. 205.20 (B) Rs.210 (C) Rs. 216 (D) Rs. 240

14) if the market price of 30 articles is equal to selling price of 40 articles, then find the % of discount. ()
A) 25% B) 33.33% C) 40% D) 20%

15) Adyta walked 15m towards south and took a right turn and walked 3m, he took right turn again and walked 15m before stopping. which direction did he face ()
A) EAST B) WEST C) NORTH D) SOUTH



SRI CHINTALAPATI VARA PRASADA MURTHY RAJU
GOVERNMENT DEGREE COLLEGE

GANAPAVARAM-534 198

ESTD. 1972 • AFFILIATED TO ADIKAVI NANNAYA UNIVERSITY • ACCREDITED NAAC 'B'



JAWAHAR KNOWLEDGE CENTRE

Certificate Course in "Analytical Skills"

Formative Assessment Test

13
15

Max. Marks: 15

Time: 30 minutes

Name of the Student: *Guda Naveen*

Group: *B.A*

Admn. No.: *6156*

- 1) South is related to North-West in the same way as West is related to ()
(A) East (B) South (C) South-West (~~D) North-East~~
- 2) Street is related to Lane in the same way as Road is related to ()
(~~A) Avenue~~ (B) Highway (C) Junction (D) Footpath
- 3) Find out the wrong number in each sequence: ()
25, 36, 49, 81, 121, 169, 225
(A) 169 (~~B) 121~~ (C) 49 (D) 36
- 4) Find out the wrong number in each sequence: ()
4, 6, 8, 9, 10, 11, 12
(A) 9 (B) 10 (~~C) 11~~ (D) 12
- 5) Meeta is two years older than Sunita. After six years the sum of their ages will be seven times their present age. Find out the age of Meeta ()
(A) 6 years (B) 8 years (C) 10 years (~~D) Data inadequate~~
- 6) Sachin was twice as old as Ajay 10 years back. How old is Ajay today if Sachin will be 40 years old 10 years hence? ()
(A) 10 years (~~B) 20 years~~ (C) 30 years (D) 50 years
- 7) A city has a population of 3,00,000 out of which 1,80,000 are males. 50% of the population is literate. If 70% of the males are literate, then the percentage of females who are literate is ()
(A) 10% (~~B) 20%~~ (C) 25% (D) 30%
- 8) The HCF of two numbers is 11 and their LCM is 7700. If one of these numbers is 275, then the other one is ()
(A) 918 (~~B) 308~~ (C) 283 (D) 279
- 9) The H.C.F. and L.C.M. of two numbers are 50 and 250 respectively. If the first number is divided by 2, the quotient is 50. The second number is ()
(A) 50 (B) 100 (~~C) 105~~ (~~D) 125~~
- 10) The smallest prime number greater than 1000 is ()
(A) 1001 (~~B) 1003~~ (~~C) 1009~~ (~~D) 1007~~
- 11) January 7, 1992 was Tuesday. Find the day of the week on the same date after 5 years, i.e., on January 7, 1997? ()
(A) Monday (B) Tuesday (~~C) Wednesday~~ (D) Friday (E) Friday

12) The average age of 30 students is 9 years. If the age of their teacher is included, it becomes 10 years. The age of the teacher (in years) is ()
(A) 31 (B) 35 (C) 40 (D) 43

13) A table is offered for Rs. 300 with 20% and 10% off. If in addition, a discount of 5% is offered on cash payment, then the cash price of the table is ()
(A) Rs. 205.20 (B) Rs. 210 (C) Rs. 216 (D) Rs. 240

14) If the market price of 30 articles is equal to selling price of 40 articles, then find the % of discount.
A) 25% B) 33.33% C) 40% D) 20%

15) Adyta walked 15m towards south and took a right turn and walked 3m, he took right turn again and walked 15m before stopping. Which direction did he face ()
A) EAST B) WEST C) NORTH D) SOUTH

CIRCULAR

DT: 16-2-2018

All the "Analytical Skills" certificate course students are instructed to attend the "Summative Test" on 18-2-2018 with out fail.

Venue: JKC ROOM


TIME: 4 PM TO 5 PM

DATE: 18-2-2018

For circulation:

1. IInd BA - D.V.K. Sub

2. IInd BSc (BZC)



JKC, COORDINATOR
Govt. Degree College,
Ganapavaram.



PRINCIPAL
S.CH.V.P.M.R. Govt. Degree College
GANAPAVARAM-534198. (W.G. Dist)

Principal
S.CH.V.P.M.R. Govt. Degree College
GANAPAVARAM-534198. (W.G. Dist)

JKC, COORDINATOR
Govt. Degree College,
Ganapavaram.

Name Of The Office

Attendance Register

Month - Feb 2018

Year

Total no of working days 28 Remarks: 1-30

S. No.	NAME	Designation																					Total no of working days	Remarks										
			1	2	3	4	5	6	7	8	9	10	11	12	13	14	15	16	17	18	19	20			21	22	23	24	25	26	27	28	29	30
1.	P. Mounika	6251	P	P	P	P	P	P	P	P	P	P	P	P	P	P	P	P	P	P	P	P	P	P	P	P	P	P	P	P	P	P	28	93%
2.	K. Mary mata	6261	P	P	P	P	P	P	P	P	P	P	P	P	P	P	P	P	P	P	P	P	P	P	P	P	P	P	P	P	P	P	25	89%
3.	M. Mounika	6219	P	P	P	P	P	P	P	P	P	P	P	P	P	P	P	P	P	P	P	P	P	P	P	P	P	P	P	P	P	P	26	86%
4.	G. Mounika	6178	P	P	P	P	P	P	P	P	P	P	P	P	P	P	P	P	P	P	P	P	P	P	P	P	P	P	P	P	P	P	26	86%
5.	B. Alekhya	6185	P	P	P	P	P	P	P	P	P	P	P	P	P	P	P	P	P	P	P	P	P	P	P	P	P	P	P	P	P	P	27	90%
6.	D. Naga Raju	6218	P	P	P	P	P	P	P	P	P	P	P	P	P	P	P	P	P	P	P	P	P	P	P	P	P	P	P	P	P	P	27	90%
7.	P. Rama Lakshmi	6175	P	P	P	P	P	P	P	P	P	P	P	P	P	P	P	P	P	P	P	P	P	P	P	P	P	P	P	P	P	P	27	90%
8.	G. Naveen	6156	P	P	P	P	P	P	P	P	P	P	P	P	P	P	P	P	P	P	P	P	P	P	P	P	P	P	P	P	P	P	26	86%
9.	B. vara prasad	6162	P	P	P	P	P	P	P	P	P	P	P	P	P	P	P	P	P	P	P	P	P	P	P	P	P	P	P	P	P	P	27	90%
10.	S. Sampath Kumar	6173	P	P	P	P	P	P	P	P	P	P	P	P	P	P	P	P	P	P	P	P	P	P	P	P	P	P	P	P	P	P	27	90%
11.	V. Hepsiba	6250	P	P	P	P	P	P	P	P	P	P	P	P	P	P	P	P	P	P	P	P	P	P	P	P	P	P	P	P	P	P	25	83%
12.	S. Sireesha	6140	P	P	P	P	P	P	P	P	P	P	P	P	P	P	P	P	P	P	P	P	P	P	P	P	P	P	P	P	P	P	28	93%
13.	M. Mohissin	6189	P	P	P	P	P	P	P	P	P	P	P	P	P	P	P	P	P	P	P	P	P	P	P	P	P	P	P	P	P	P	27	90%
14.	A. Shakeela Rani	6237	P	P	P	P	P	P	P	P	P	P	P	P	P	P	P	P	P	P	P	P	P	P	P	P	P	P	P	P	P	P	27	90%
15.	B. Alekhya	6248	P	P	P	P	P	P	P	P	P	P	P	P	P	P	P	P	P	P	P	P	P	P	P	P	P	P	P	P	P	P	27	90%
16.	M. Bhukayya	6228	P	P	P	P	P	P	P	P	P	P	P	P	P	P	P	P	P	P	P	P	P	P	P	P	P	P	P	P	P	P	27	90%
17.	B. Bhavani	6149	P	P	P	P	P	P	P	P	P	P	P	P	P	P	P	P	P	P	P	P	P	P	P	P	P	P	P	P	P	P	27	90%
18.	M. Divya	6131	P	P	P	P	P	P	P	P	P	P	P	P	P	P	P	P	P	P	P	P	P	P	P	P	P	P	P	P	P	P	27	90%
19.	M. Ramya Sree	6230	P	P	P	P	P	P	P	P	P	P	P	P	P	P	P	P	P	P	P	P	P	P	P	P	P	P	P	P	P	P	27	90%
20.	R. Mamatha	6231	P	P	P	P	P	P	P	P	P	P	P	P	P	P	P	P	P	P	P	P	P	P	P	P	P	P	P	P	P	P	28	93%
21.	T. Ambika	6201	P	P	P	P	P	P	P	P	P	P	P	P	P	P	P	P	P	P	P	P	P	P	P	P	P	P	P	P	P	P	27	90%
22.	S. Salma begum	6132	P	P	P	P	P	P	P	P	P	P	P	P	P	P	P	P	P	P	P	P	P	P	P	P	P	P	P	P	P	P	26	86%
23.	K. Jhansi	6150	P	P	P	P	P	P	P	P	P	P	P	P	P	P	P	P	P	P	P	P	P	P	P	P	P	P	P	P	P	P	28	93%
24.	T. Prema jyothi	6235	P	P	P	P	P	P	P	P	P	P	P	P	P	P	P	P	P	P	P	P	P	P	P	P	P	P	P	P	P	P	26	86%
25.	A. Sinisha Rani	6152	P	P	P	P	P	P	P	P	P	P	P	P	P	P	P	P	P	P	P	P	P	P	P	P	P	P	P	P	P	P	27	90%
26.	A. Sree Ramya	6193	P	P	P	P	P	P	P	P	P	P	P	P	P	P	P	P	P	P	P	P	P	P	P	P	P	P	P	P	P	P	28	93%
27.	B. Param jyothi	6238	P	P	P	P	P	P	P	P	P	P	P	P	P	P	P	P	P	P	P	P	P	P	P	P	P	P	P	P	P	P	26	86%
28.	G. Kousalya	6161	P	P	P	P	P	P	P	P	P	P	P	P	P	P	P	P	P	P	P	P	P	P	P	P	P	P	P	P	P	P	25	83%
29.	M. Jhansi	6198	P	P	P	P	P	P	P	P	P	P	P	P	P	P	P	P	P	P	P	P	P	P	P	P	P	P	P	P	P	P	26	86%
30.	P. sarvani	6210	P	P	P	P	P	P	P	P	P	P	P	P	P	P	P	P	P	P	P	P	P	P	P	P	P	P	P	P	P	P	29	96%

J.C. COORDINATOR
Govt. Degree College
Ganapavaram.

PRINCIPAL
S.CH.V.P.M.R.Govt. Degree College
GANAPAVARAM-574198 (N.G. Dist)
SREE SRINIVASA & CO. VU-1



SRI CHINTALAPATI VARA PRASADA MURTHY RAJU
GOVERNMENT DEGREE COLLEGE

GANAPAVARAM-534 198

ESTD. 1972 • AFFILIATED TO ADIKAVI NANNAYA UNIVERSITY • ACCREDITED NAAC 'B'



JAWAHAR KNOWLEDGE CENTRE

Certificate Course in "Analytical Skills"

Summative Assessment Test at the End of the Course

22
25

Max. Marks: 25
Time: 50 minutes

Name of the Student: Giuda Naveen

Group: B.A

Admn. No.: 6156

- 1) Bread is related to Wheat in the same way as Brick is related to _____
(A) Building (B) Cement (C) Clay (D) Fire
- 2) South is related to North-West in the same way as West is related to _____
(A) East (B) South (C) South-West (D) North-East
- 3) Street is related to Lane in the same way as Road is related to _____
(A) Avenue (B) Highway (C) Junction (D) Footpath
- 4) Motorcycle is related to Battery in the same way as Life is related to _____
(A) Star (B) Moon (C) Sun (D) Earth
- 5) Find out the wrong number in each sequence _____
25, 36, 49, 81, 121, 169, 225
(A) 169 (B) 121 (C) 49 (D) 36
- 6) Find out the wrong number in each sequence: _____
4, 6, 8, 9, 10, 11, 12
(A) 9 (B) 10 (C) 11 (D) 12
- 7) Meeta is two years older than Sunita. After six years the sum of their ages will be seven times their present age. Find out the age of Meeta _____
(A) 6 years (B) 8 years (C) 10 years (D) Data inadequate
- 8) Sachin was twice as old as Ajay 10 years back. How old is Ajay today if Sachin will be 40 years old 10 years hence? _____
(A) 10 years (B) 20 years (C) 30 years (D) 50 years
- 9) The price for a pair of cuff links is Rs.1.00. The price for a 5 pair package of cuff links is Rs.3.40. The 5 pair package is what percent cheaper per paid than 5 pairs purchased separately? _____
(A) 30% (B) 32% (C) 47% (D) 62%
- 10) A city has a population of 3,00,000 out of which 1,80,000 are males. 50% of the population is literate. If 70% of the males are literate, then the percentage of females who are literate is _____
(A) 10% (B) 20% (C) 25% (D) 30%
- 11) In an examination, 80% of the students passed in English, 85% in Mathematics and 75% in both English and Mathematics. If 40 students failed in both the subjects the total number of students is _____
(A) 200 (B) 400 (C) 600 (D) 800
- 12) The HCF of two numbers is 11 and their LCM is 7700. If one of these numbers is 275, then the other one is _____
(A) 918 (B) 308 (C) 283 (D) 279

- 13) The H.C.F. and L.C.M. of two numbers are 50 and 250 respectively. If the first number is divided by 2, the quotient is 50. The second number is _____
 (A) 50 (B) 100 (C) 105 (D) 125
- 14) The smallest prime number greater than 1000 is _____
 (A) 1001 (B) 1003 (C) 1009 (D) 1007
- 15) January 7, 1992 was Tuesday. Find the day of the week on the same date after 5 years, i.e., on January 7, 1997?
 (A) Monday (B) Tuesday (C) Wednesday (D) Friday (E) Friday
- 16) The average age of 30 students is 9 years. If the age of their teacher is included, it becomes 10 years. The age of the teacher (in years) is _____
 (A) 31 (B) 35 (C) 40 (D) 43
- 17) Arun bought 15 kg of dal at the rate of Rs. 14.50 per kg and 10 kg at the rate of Rs. 13 per kg. He mixed the two and sold the mixture at the rate of Rs. 15 per kg. What was his total gain in this transaction?
 (A) Rs. 11 (B) Rs. 16.50 (C) Rs. 27.50 (D) Rs. 35.50
- 18) A table is offered for Rs. 300 with 20% and 10% off. If in addition, a discount of 5% is offered on cash payment, then the cash price of the table is _____
 (A) Rs. 205.20 (B) Rs. 210 (C) Rs. 216 (D) Rs. 240
- 19) The price of a T.V. set worth Rs. 20,000 is to be paid in 20 installments of Rs. 1000 each. If the rate of interest be 6% per annum, and the first installments be paid at the time of purchase, then the value of the last installments covering the interest as well will be _____
 (A) Rs. 2050 (B) Rs. 3000 (C) Rs. 12000 (D) Rs. 19000
- 20) The interest earned on Rs. 15000 in 3 years at simple interest is Rs. 5400. Find the rate of interest per annum _____
 (A) 11% (B) 11.5% (C) 12% (D) 12.5%
- 21) If the market price of 30 articles is equal to selling price of 40 articles, then find the % of discount _____
 (A) 25% (B) 33.33% (C) 40% (D) 20%
- 22) Aditya walked 15m towards south and took a right turn and walked 3m, he took right turn again and walked 15m before stopping. Which direction did he face _____
 (A) EAST (B) WEST (C) NORTH (D) SOUTH
- 23) A shop keeper selling his goods at 7% loss, had he sold it for Rs. 800 more than he would get 9% profit find the CP of that article. _____
 (A) 500 (B) 6000 (C) 5000 (D) 4500
- 24) A told B, "yesterday I met the only brother of the daughter of my grandmother". Whom did A meet?
 (A) Cousin (B) Brother (C) Nephew (D) Son (E) Father
- 25) 8 men can do a piece of work in 12 days while 20 women can do it in 10 days. In how many days 12 men and 15 women can complete the same work. _____
 (A) 4 (B) 5 (C) 6 (D) 7

@@@@@@@@@@



SRI CHINTALAPATI VARA PRASADA MURTHY RAJU
GOVERNMENT DEGREE COLLEGE

GANAPAVARAM-534 198

ESTD. 1972 • AFFILIATED TO AOKAVI NANNAYA UNIVERSITY • ACCREDITED NAAC 'B'



JAWAHAR KNOWLEDGE CENTRE

Certificate Course in "Analytical Skills"

Summative Assessment Test at the End of the Course

20/25

Max. Marks: 25

Time: 50 minutes

Name of the Student: Gurram mounika

Group: BA

Admn. No.: 6178

- 1) Bread is related to Wheat in the same way as Brick is related to _____
(A) Building (B) Cement ~~(C) Clay~~ (D) Fire ✓
- 2) South is related to North-West in the same way as West is related to _____
(A) East (B) South (C) South-West ~~(D) North-East~~ ✓
- 3) Street is related to Lane in the same way as Road is related to _____
~~(A) Avenue~~ (B) Highway (C) Junction (D) Footpath ✓
- 4) Motorcycle is related to Battery in the same way as Life is related to _____
(A) Star ~~(B) Moon~~ (C) Sun (D) Earth ✓
- 5) Find out the wrong number in each sequence _____
25, 36, 49, 81, 121, 169, 225
(A) 169 ~~(B) 121~~ ~~(C) 49~~ (D) 36 ✓
- 6) Find out the wrong number in each sequence: _____
4, 6, 8, 9, 10, 11, 12
(A) 9 (B) 10 ~~(C) 11~~ (D) 12 ✓
- 7) Meeta is two years older than Sunita. After six years the sum of their ages will be seven times their present age. Find out the age of Meeta _____
(A) 6 years (B) 8 years (C) 10 years ~~(D) Data inadequate~~ ✓
- 8) Sachin was twice as old as Ajay 10 years back. How old is Ajay today if Sachin will be 40 years old 10 years hence? _____
(A) 10 years ~~(B) 20 years~~ (C) 30 years (D) 50 years ✓
- 9) The price for a pair of cuff links is Rs.1.00. The price for a 5 pair package of cuff links is Rs.3.40. The 5 pair package is what percent cheaper per pair than 5 pairs purchased separately? _____
(A) 30% ~~(B) 32%~~ (C) 47% (D) 62% ✓
- 10) A city has a population of 3,00,000 out of which 1,80,000 are males. 50% of the population is literate. If 70% of the males are literate, then the percentage of females who are literate is _____
(A) 10% (B) 20% ~~(C) 25%~~ ~~(D) 30%~~ ✓
- 11) In an examination, 80% of the students passed in English, 85% in Mathematics and 75% in both English and Mathematics. If 40 students failed in both the subjects the total number of students is _____
(A) 200 ~~(B) 400~~ (C) 600 (D) 800 ✓
- 12) The HCF of two numbers is 11 and their LCM is 7700. If one of these numbers is 275, then the other one is _____
(A) 918 ~~(B) 308~~ (C) 283 (D) 279 ✓

13) The H.C.F. and L.C.M. of two numbers are 50 and 250 respectively. If the first number is divided by 2, the quotient is 50. The second number is _____
(A) 50 (B) 100 (C) 105 (D) 125

14) The smallest prime number greater than 1000 is _____
(A) 1001 (B) 1003 (C) 1009 (D) 1007

15) January 7, 1992 was Tuesday. Find the day of the week on the same date after 5 years, i.e., on January 7, 1997? _____
(A) Monday (B) Tuesday (C) Wednesday (D) Friday (E) Friday

16) The average age of 30 students is 9 years. If the age of their teacher is included, it becomes 10 years. The age of the teacher (in years) is _____
(A) 31 (B) 35 (C) 40 (D) 43

17) Arun bought 15 kg of dal at the rate of Rs. 14.50 per kg and 10 kg at the rate of Rs. 13 per kg. He mixed the two and sold the mixture at the rate of Rs. 15 per kg. What was his total gain in this transaction? _____
(A) Rs. 11 (B) Rs. 16.50 (C) Rs. 27.50 (D) Rs. 35.50

18) A table is offered for Rs. 300 with 20% and 10% off. If in addition, a discount of 5% is offered on cash payment, then the cash price of the table is _____
(A) Rs. 205.20 (B) Rs. 210 (C) Rs. 216 (D) Rs. 240

19) The price of a T.V. set worth Rs. 20,000 is to be paid in 20 installments of Rs. 1000 each. If the rate of interest be 6% per annum, and the first installments be paid at the time of purchase, then the value of the last installments covering the interest as well will be _____
(A) Rs. 2050 (B) Rs. 3000 (C) Rs. 12000 (D) Rs. 19000

20) The interest earned on Rs. 15000 in 3 years at simple interest is Rs. 5400. Find the rate of interest per annum _____
(A) 11% (B) 11.5% (C) 12% (D) 12.5%

21) If the market price of 30 articles is equal to selling price of 40 articles, then find the % of discount _____
(A) 25% (B) 33.33% (C) 40% (D) 20%

22) Aditya walked 15m towards south and took a right turn and walked 3m, he took right turn again and walked 15m before stopping. Which direction did he face _____
(A) EAST (B) WEST (C) NORTH (D) SOUTH

23) A shop keeper selling his goods at 7% loss, had he sold it for Rs 800 more than he would get 9% profit find the CP of that article. _____
(A) 500 (B) 6000 (C) 5000 (D) 4500

24) A told B, "yesterday I met the only brother of the daughter of my grandmother". Whom did A meet? _____
(A) Cousin (B) Brother (C) Nephew (D) Son (E) Father

25) 8 men can do a piece of work in 12 days while 20 women can do it in 10 days. In how many days 12 men and 15 women can complete the same work. _____
(A) 4 (B) 5 (C) 6 (D) 7

@@@@@@@@@@



SRI CHINTALAPATI VARA PRASADA MURTHY RAJU
GOVERNMENT DEGREE COLLEGE

GANAPAVANAM-534 198

ESTD. 1972 • AFFILIATED TO ADIKAVI NANNAYA UNIVERSITY • ACCREDITED NAAC 'B'



(Affiliated to Adikavi Nannaya University, Rajamahendravaram, A.P.)

Department of Jawahar Knowledge Centre

Certificate course on "Analytical Skills"

Academic Year: 2017-18

RESULT SHEET

Sl.No.	Admn. No.	Class	Name of the Student	FA	SA	Total	Grade
				Marks	Marks	40	
				15	25		
1	6251	BA	PADMANABHUNI MOUNIKA	12	20	32	A
2	6261	BA	KUSUME MERYMATA	11	19	30	B
3	6219	BA	MADHUM MOUNIKA	10	20	30	B
4	6178	BA	GURRAM MOUNIKA	11	20	31	A
5	6185	BA	BONTHA ALEKHYA	09	18	27	B
6	6213	BA	DENDUKERI NAGA RAJU	10	22	32	A
7	6175	BA	PALLI RAMA LAKSHMI	10	19	29	B
8	6156	BA	GUDA NAVEEN	13	22	35	A
9	6162	BA	BAYYAVARAPU VARA PRASAD	13	18	31	A
10	6173	BA	SAKALABATTULA SAMPATH KUMAR	12	20	32	A
11	6250	BA	VASUPALLI HEPSIBA	12	18	30	B
12	6140	BA	SOMA SIREESHA	11	20	31	A
13	6189	BA	MOHAMMAD MOHISSIN	10	21	31	A
14	6237	BA	ALAMURI SHAKEELA RANI	08	19	27	B
15	6248	BA	BETU ALEKHYA	AB	AB	AB	F
16	6228	BSC(BZC)	MADASI BHUKAYYA	12	20	32	A
17	6149	BSC(BZC)	BALE BHAVANI	12	18	30	B
18	6131	BSC(BZC)	MADDALA DIVYA	11	20	31	A
19	6230	BSC(BZC)	MUTYALA RAMYA SREE	13	21	34	A
20	6231	BSC(BZC)	RAJALA MAMATHA	10	19	29	B
21	6201	BSC(BZC)	PANDRANKI AMBIKA	11	21	32	A
22	6132	BSC(BZC)	SHEIK SALMA BEGUM	10	11	21	C

23	6150	BSC(BZC)	KASIREDDY JHANSI				
24	6235	BSC(BZC)	THOTA PREMA JYOTHI	10	15	25	B
25	6252	BSC(BZC)	AMBATI SIRISHA RANI	12	20	32	A
26	6195	BSC(BZC)	ANIPE SREE RAMYA	AB	AB	AB	F
27	6238	BSC(BZC)	BATRAJU PARAMJYOTHI	AB	AB	AB	F
28	6161	BSC(BZC)	GORLA KOUSALYA	10	15	25	B
29	6198	BSC(BZC)	MANDILA JHANSI	12	20	32	A
30	6210	BSC(BZC)	PORAPU SARVANI	08	13	21	C
				10	10	20	C

Grade: > 30 - A, 26 to 30-B, 21 to 25-C, 15 to 20 -D, < 15 - Fail



S.CH.V.P.M.R.Govt.Degree College
GANAPAVARAM-534198. (W.G.Dist)



J.K.C. COORDINATOR
Govt. Degree College,
Ganapavaram.

CERTIFICATE COURSES under JKC PLATFORM, SCHVPMR GOVT. DEGREE COLLEGE, GANAPAVARAM

COURSE-WISE ABSTRACT

ANALYTICAL SKILLS (DURATION:04-12-2017 TO 17-02-2018=30 DAYS)

Name of the Certificate Course:

SL. No.	Name of the student	College Admn. No.	Academic year	Batch No.	Whether qualified?	Whether received Certificate	Signature of the Student
1	PADMANABHUNI MOUNIKA	6251	2017-18	II	YES	YES	P. Mounika
2	KUSUME MERYMATA	6261	2017-18	II	YES	YES	Kusuma Merymata
3	MADHUM MOUNIKA	6219	2017-18	II	YES	YES	M. Mounika
4	GURRAM MOUNIKA	6178	2017-18	II	YES	YES	G. Mounika
5	BONTHA ALEKHYA	6185	2017-18	II	YES	YES	B. Alekhya
6	DENDUKERI NAGA RAJU	6213	2017-18	II	YES	YES	D. Nagaraju
7	PALLI RAMA LAKSHMI	6175	2017-18	II	YES	YES	P. Rama Lakshmi
8	GUDA NAVEEN	6156	2017-18	II	YES	YES	G. Naveen
9	BAYYAVARAPU VARA PRASAD	6162	2017-18	II	YES	YES	B. Varaprasad
10	SAKALABATTULA SAMPATH KUMAR	6173	2017-18	II	YES	YES	S. Sampath Kumar
11	VASUPALLI HEPSIBA	6250	2017-18	II	YES	YES	V. Hepsiba
12	SOMA SIREESHA	6140	2017-18	II	YES	YES	S. Sirisha
13	MOHAMMAD MOHISSIN	6189	2017-18	II	YES	YES	M. Mohissin
14	ALAMURI SHAKEELA RANI	6237	2017-18	II	YES	YES	A. Shakeela Rani
15	BETU ALEKHYA	6248	2017-18	II	NO	—	B. Alekhya
16	MADASI BHUKAYYA	6228	2017-18	II	YES	YES	M. Bhukayya
17	BALE BHAVANI	6149	2017-18	II	YES	YES	B. Bhavani
18	MADDALA DIVYA	6131	2017-18	II	YES	YES	M. Divya
19	MUTYALA RAMYA SREE	6230	2017-18	II	YES	YES	M. Ramya Sree
20	RAJALA MAMATHA	6231	2017-18	II	YES	YES	R. Mamatha
21	PANDRANKI AMBIKA	6201	2017-18	II	YES	YES	Pandranki Ambika
22	SHEIK SALMA BEGUM	6132	2017-18	II	YES	YES	Sheik Salma Begum
23	KASIREDDY JHANSI	6150	2017-18	II	YES	YES	K. Jhansi
24	THOTA PREMA JYOTHI	6235	2017-18	II	YES	YES	T. P. Jyothi
25	AMBATI SIRISHA RANI	6152	2017-18	II	NO	—	—
26	ANIPE SREE RAMYA	6195	2017-18	II	NO	—	—
27	BATRAJU PARAMJYOTHI	6238	2017-18	II	YES	YES	B. Paramjyothi
28	GORLA KOUSALYA	6181	2017-18	II	YES	YES	G. Kousalya
29	MANDILA JHANSI	6198	2017-18	II	YES	YES	M. Jhansi
30	PORAPU SARVANI	6210	2017-18	II	YES	YES	P. Sarvani

I/c PRINCIPAL

S.CH.V.P.M.P. Govt. Degree College
Accredited "B" by NAAC
GANAPAVARAM-534198 (Eluru Dist.)



SRI CHINTALAPATI VARA PRASADA MURTHY RAJU
GOVERNMENT DEGREE COLLEGE

GANAPAVARAM-534 198

ESTD. 1972 • AFFILIATED TO ADIKAVI NANNAYA UNIVERSITY • ACCREDITED NAAC 'B'



Department of Jawahar Knowledge Centre
Certificate course Report on "Analytical Skills"
Academic Year: 2017-18

Certificate Courses are a great value addition to the affiliating university curriculum. They widen the area of curriculum and strengthen the content in the curriculum. The Institution duly recognizes the key role of certificate courses in enhancing the skills of the UG students. Therefore, the College offers four certificate courses through its Jawahar Knowledge Centre Platform (JKC), Placement and Training Cell.

Sl. No.	Name of the Course	Duration
1	Analytical skills	30-40 days

A set of syllabus is adopted for each course with specified objectives and outcomes, and it is taught by a qualified faculty member/trainer. During the course, 6 formative assessment tests are conducted to monitor the student progress and provide feedback for improvement. A summative assessment test is conducted for a total of 25 marks, with 15 marks as the qualifying mark. Certificates are distributed to the students who successfully completed the course and met the qualifying marks.

In the academic year 2017-18, the four certificate courses were offered twice. 30 students got enrolled into this certificate course, as per the schedule and time table. During the course, blending teaching methods were adopted. In the summative assessment test, only 27 students scored qualifying marks. All the qualified students were given Certificates of Achievement.

Name of the Course	Name of the Faculty	Course Duration	Qualified/Registered
Analytical Skills	Sri I.V.L.R.K.Prasad	04-12-2017 to 17-02-2018(30 Days)	27/30

Name of the Course	Objectives Stated	Outcomes Achieved
Analytical Skills	<ol style="list-style-type: none"> 1. To develop analytical and critical thinking skills in students. 2. To provide hands-on experience in applying analytical methods to real-world problems. 3. To enhance data interpretation and problem-solving skills in students. 	<ol style="list-style-type: none"> 1. Improved analytical and critical thinking abilities in students. 2. Increased ability to apply analytical methods to real-world problems. 3. Enhanced data interpretation and problem-solving skills.

On the whole, the certificate course was successful in achieving their objectives, providing students with valuable skills and knowledge in the field of analytical skills.



COURSE COORDINATOR
Govt. Degree College,
Ganapavaram.



PRINCIPAL (F.A.C)
S.CH.V.P.M.R. Govt. Degree College
Accredited "B" by NAAC
GANAPAVARAM (W.G.DC.,)



SRI CHINTALAPATI VARA PRASADA MURTHY RAJU
GOVERNMENT DEGREE COLLEGE

GANAPAVARAM - 534 198


ESTD. 1972 • AFFILIATED TO ADIKAVI NANNAYA UNIVERSITY • ACCREDITED NAAC 'B'



CERTIFICATE

This is to certify that
BONTHA ALEKHYA, III B.A(Admin No:6185)
of
SCHVPMR Govt Degree College, Ganapavaram
Has successfully completed certificate course on
"ANALYTICAL SKILLS" held from 04 Dec, 2017 – 17 Feb, 2018
Offered by Department of Jawahar Knowledge Centre with grade "B"


I.V.L.R.K Prasad
Course Coordinator


P.Madhu Raju
Principal(FAC)



SRI CHINTALAPATI VARA PRASADA MURTHY RAJU
GOVERNMENT DEGREE COLLEGE

GANAPAVARAM-534 198


ESTD. 1972 • AFFILIATED TO ADIKAVI NANNAYA UNIVERSITY • ACCREDITED NAAC 'B'



CERTIFICATE

This is to certify that
MADALA DIVYA, III B.Sc(BZC)(Admin No:6131)
of
SCHVPMR Govt Degree College, Ganapavaram
Has successfully completed certificate course on
"ANALYTICAL SKILLS" held from 04 Dec, 2017 – 17 Feb, 2018
Offered by Department of Jawahar Knowledge Centre with grade "A"


I.V.L.R.K Prasad
Course Coordinator


P. Madhu Raju
Principal(FAC)